

**Bikini Bottom Genetics**

Name \_\_\_\_\_

Scientists at Bikini Bottoms have been investigating the genetic makeup of the organisms in this community. Use the information provided and your knowledge of genetics to answer each question.

1. For each genotype below, indicate whether it is a heterozygous (He) OR homozygous (Ho).

TT \_\_\_\_\_ Bb \_\_\_\_\_ DD \_\_\_\_\_ Ff \_\_\_\_\_ tt \_\_\_\_\_ dd \_\_\_\_\_  
 Dd \_\_\_\_\_ ff \_\_\_\_\_ Tt \_\_\_\_\_ bb \_\_\_\_\_ BB \_\_\_\_\_ FF \_\_\_\_\_


Which of the genotypes in #1 would be considered purebred?  
 Which of the genotypes in #1 would be hybrids?

2. Determine the phenotype for each genotype using the information provided about SpongeBob.



Yellow body color is dominant to blue.  
 YY \_\_\_\_\_ Yy \_\_\_\_\_ Yy \_\_\_\_\_  
 Square shape is dominant to round.  
 SS \_\_\_\_\_ Ss \_\_\_\_\_ Ss \_\_\_\_\_

3. For each phenotype, give the genotypes that are possible for Patrick.



A tall head (T) is dominant to short (t).  
 Tall = \_\_\_\_\_ Short = \_\_\_\_\_  
 Pink body color (P) is dominant to yellow (p).  
 Pink body = \_\_\_\_\_ Yellow body = \_\_\_\_\_

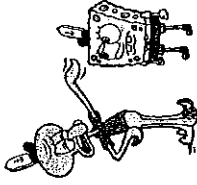
4. SpongeBob SquarePants recently met SpongeSusie Roundpants at a dance. SpongeBob is heterozygous for his square shape, but SpongeSusie is round. Create a Punnett square to show the possibilities that would result if SpongeBob and SpongeSusie had children. HINT: Read question #2!


- A. List the possible genotypes and phenotypes for their children.
- B. What are the chances of a child with a square shape? \_\_\_\_\_ out of \_\_\_\_\_ or \_\_\_\_\_ %
- C. What are the chances of a child with a round shape? \_\_\_\_\_ out of \_\_\_\_\_ or \_\_\_\_\_ %

5. Patrick met Patti at the dance. Both of them are heterozygous for their pink body color, which is dominant over a yellow body color. Create a Punnett square to show the possibilities that would result if Patrick and Patti had children. HINT: Read question #3!


- A. List the possible genotypes and phenotypes for their children.
- B. What are the chances of a child with a pink body? \_\_\_\_\_ out of \_\_\_\_\_ or \_\_\_\_\_ %
- C. What are the chances of a child with a yellow body? \_\_\_\_\_ out of \_\_\_\_\_ or \_\_\_\_\_ %

6. Everyone in Squidward's family has light blue skin, which is the dominant trait for body color in his hometown of Squid Valley. His family brags that they are a "purebred" line. He recently married a nice girl who has light green skin, which is a recessive trait. Create a Punnett square to show the possibilities that would result if Squidward and his new bride had children. Use B to represent the dominant gene and b to represent the recessive gene.




- A. List the possible genotypes and phenotypes for their children.
- B. What are the chances of a child with light blue skin? \_\_\_\_\_ %
- C. What are the chances of a child with light green skin? \_\_\_\_\_ %
- D. Would Squidward's children still be considered purebreds? Explain!

7. Assume that one of Squidward's sons, who is heterozygous for the light blue body color, married a girl that was also heterozygous. Create a Punnett square to show the possibilities that would result if they had children.


- A. List the possible genotypes and phenotypes for their children.
- B. What are the chances of a child with light blue skin? \_\_\_\_\_ %
- C. What are the chances of a child with light green skin? \_\_\_\_\_ %

8. Mr. Krabbs and his wife recently had a Lil' Krabby, but it has not been a happy occasion for them. Mrs. Krabbs has been upset since she first saw her new baby who had short eyeballs. She claims that the hospital goofed and mixed up her baby with someone else's baby. Mr. Krabbs is homozygous for his tall eyeballs, while his wife is heterozygous for her tall eyeballs. Some members of her family have short eyes, which is the recessive trait. Create a Punnett square using T for the dominant gene and t for the recessive one.




- A. List the possible genotypes and phenotypes for their children.
- B. Did the hospital make a mistake? Explain your answer.

**Bikini Bottom Genetics 2**

Use your knowledge of genetics to complete this worksheet.

Name \_\_\_\_\_

1. Use the information for SpongeBob's traits to write the phenotype (physical appearance) for each item.

Trait	Dominant Gene	Recessive Gene
Body Shape	Squarepants (S)	Roundpants (s)
Body Color	Yellow (Y)	Blue (y)
Eye Shape	Round (R)	Oval (r)
Nose Style	Long (L)	Stubby (l)

- (a) LL \_\_\_\_\_ (e) RR \_\_\_\_\_  
 (b) yy \_\_\_\_\_ (f) ll \_\_\_\_\_  
 (c) Ss \_\_\_\_\_ (g) ss \_\_\_\_\_  
 (d) RR \_\_\_\_\_ (h) Yy \_\_\_\_\_


2. Use the information in the chart in #1 to write the genotype (or genotypes) for each trait below.

- (a) Yellow body - \_\_\_\_\_  
 (b) Roundpants - \_\_\_\_\_  
 (c) Oval eyes - \_\_\_\_\_  
 (d) Long nose - \_\_\_\_\_  
 (e) Stubby nose - \_\_\_\_\_  
 (f) Round eyes - \_\_\_\_\_  
 (g) Squarepants - \_\_\_\_\_  
 (h) Blue body - \_\_\_\_\_  
 (i) Heterozygous round eyes - \_\_\_\_\_  
 (j) Homozygous long nose - \_\_\_\_\_  
 (k) Hybrid yellow body - \_\_\_\_\_

3. Determine the genotypes for each using the information in the chart in #1.

- (a) Heterozygous round eyes - \_\_\_\_\_  
 (b) Purebred squarepants - \_\_\_\_\_

4. One of SpongeBob's cousins, SpongeBillyBob, recently met a cute squarepants gal, SpongeGerdy, at a local dance and fell in love. Use your knowledge of genetics to answer the questions below.




(a) If SpongeGerdy's father is a heterozygous squarepants and her mother is a roundpants, what is her genotype? Complete the first Punnett square to show the possible genotypes.

Based on your results, what would Gerdy's genotype have to be? \_\_\_\_\_

(b) Complete the second Punnett square to show the possibilities that would result if Billy Bob & Gerdy had children.

NOTE: SpongeBillyBob is heterozygous for his squarepantsshape.

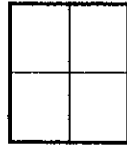


(c) What is the probability of kids with squarepants? \_\_\_\_\_ %

(d) What is the probability of kids with roundpants? \_\_\_\_\_ %

5. SpongeBob's aunt and uncle, SpongeWilma and SpongeWilbur, have the biggest round eyes in the family. Wilma is believed to be heterozygous for her round eye shape, while Wilbur's family brags that they are a pure line. Complete the Punnett square to show the possibilities that would result if SpongeWilma and SpongeWilbur had children.

(a) Give the genotype for each person. Wilma - \_\_\_\_\_ Wilbur - \_\_\_\_\_



(b) Complete the Punnett square to show the possibilities that would result if they had children.

(c) What is the probability that the kids would have round eyes? \_\_\_\_\_ %

(d) What is the probability that the kids would be oval eyes? \_\_\_\_\_ %

6. SpongeBob's mother is so proud of her son and his new wife, SpongeSusie, as they are expecting a little sponge. She knows that they have a 50% chance of having a little roundpants, but is also hoping the new arrival will be blue (a recessive trait) like SpongeSusie and many members of her family. If SpongeBob is heterozygous for his yellow body color, what are the chances that the baby sponge will be blue? Use the Punnett square to help you answer this question.



7. SpongeBob's aunt is famous around town for her itty, bitty stubby nose! She recently met a cute squarepants fellow who also has a stubby nose, which is a recessive trait. Would it be possible for them to have a child with a regular long nose? Why or why not? Use the Punnett square to help you answer this question.



8. If SpongeBob's aunt described in #7 wanted children with long noses, what type of fellow would she need to marry in order to give her the best chances? Use the Punnett square to help you answer this question.

